

SANSKAR SCHOOL

GRADE-IV

Assignment 19

Date: Thursday, 28th May 2020

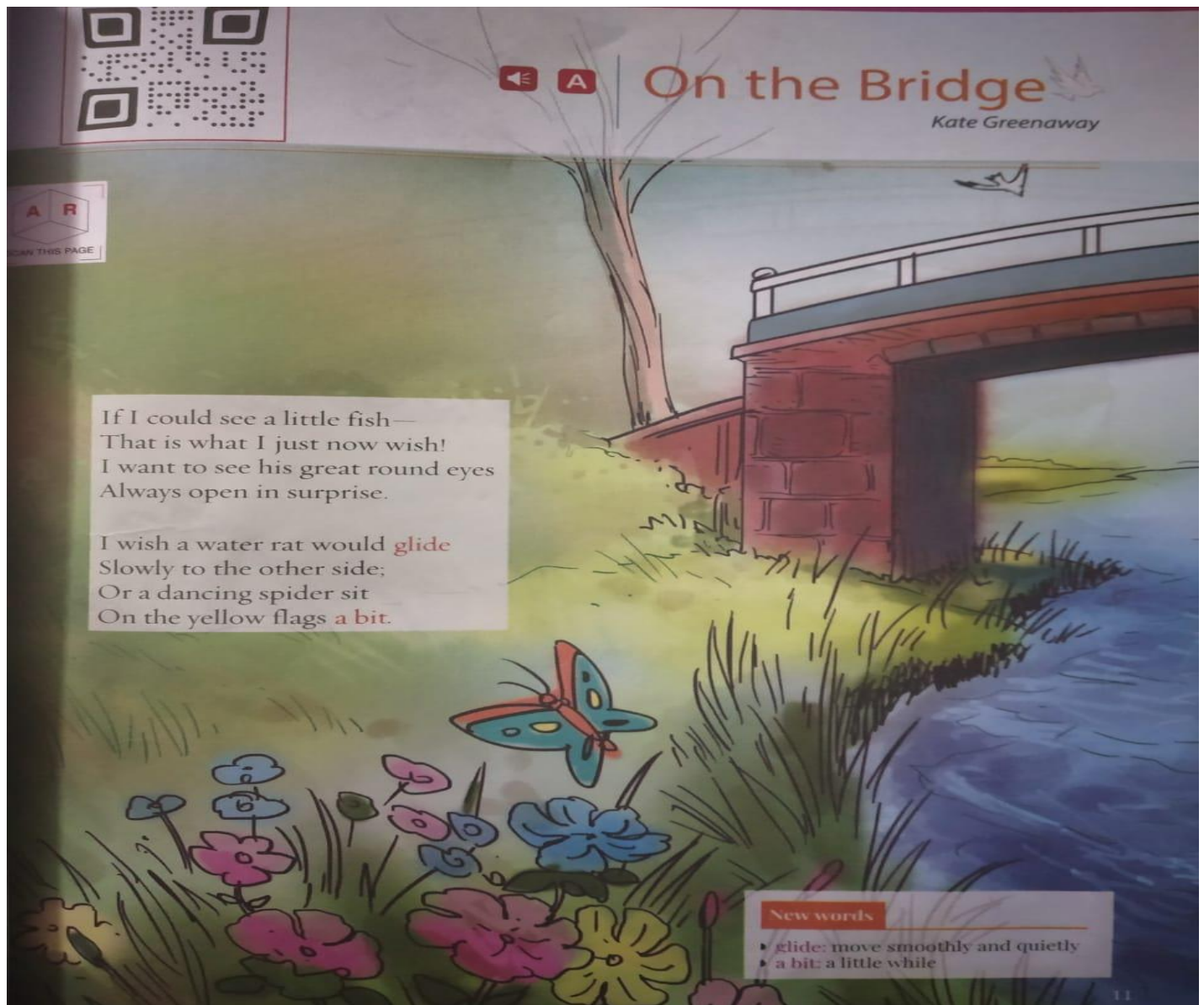
ENGLISH:


Speaking skill assessment:

Poem- On the Bridge on 28.05.20

Animated video of the Poem

https://drive.google.com/file/d/1A7t9Y27_QpjOGHyA-XK4T5XPTJojw9JM/view





I think I'll get some stones to throw,
And watch the pretty circles show.
Or shall we sail a flower-boat,
And watch it slowly—slowly float?

That's nice—because you never know
How far away it means to go;
And when tomorrow comes, you see,
It may be in the great wide sea.

Kate Greenaway was an English children's book illustrator and writer. She was among the three most influential children's writers of her times.

In this poem, the speaker and a companion are standing on a bridge and watching things around them. As they stand there, they wish to see many things—a fish, a spider, a flower-boat. The poem presents these simple things in a manner that brings great delight.

HINDI:

सर्वनाम पर आधारित कार्यपत्र करिए तथा 30.5.2020 को लिखित मूल्यांकन हेतु सर्वनाम याद करिए।

१. कोष्ठक में से उचित सर्वनाम चुनकर वाक्यों को पूरा कीजिए _____

१. वर्षा के कारण आज----- बाहर खेलने नहीं गया। (कौन / कोई)

२. ----- खाना खा रही हूँ। (तुम / मैं)

३. गीता बाज़ार से ----- लाई है। (क्या / कुछ)

४. ----- नाम क्या है ? (मेरा / तुम्हारा)

५. ----- घर मेरे घर के नज़दीक है। (उसका / मेरा)

2. दिए गए वाक्यों में से सर्वनाम शब्द को रेखांकित कीजिए और उनके भेद लिखिए।

१. मुझे साइकिल चलाना पसंद है। _____

२. जो परिश्रम करेगा, वही सफल होगा। _____

३. मोहन बाज़ार से कुछ सामान लाओ। _____

४. तुम क्या खा रहे हो ? _____

५. वह घर तुम्हारा है। _____

६. मैं स्वयं चला जाऊँगा _____

3. रेखांकित शब्दों के स्थान पर उचित सर्वनाम का प्रयोग करके वाक्य दोबारा लिखिए।

१. प्रिया की माताजी, प्रिया के लिए सुंदर सी फ्रॉक लाई।

२. रोहन, रोहन के भाई के साथ खेल रहा है।

MATHS:

Data Handling

Q1. The following table shows the monthly production of shoes by six companies. Represent this information through bar graph.

Company	Adidas	Nike	Reebok	Bata	Skechers	Fila
Production of shoes	1500	1250	1000	750	500	1000

(Scale = 1 cm = 250 shoes)

Q2. The number of people visiting a zoo on five days of the week is shown in the table given below. Represent the following information through line graph and answer the following questions.

Days	Monday	Tuesday	Wednesday	Thursday	Friday
People visited	80	120	160	100	140

- On which day least number of people visited the zoo?
- How many less people visited the zoo on Thursday than Tuesday?
- If the entry ticket costs Rs.5. What was the collection for Friday?
- What was the total number of people who visited the zoo on these five days?

UOI:

Personal Inquiry

TASK-2 Plan and investigate

1. What do you want to learn more about?
2. What factors are important for helping you learn well?
3. What new questions do you have?

Students will focus on-

- asking questions (e.g. open vs closed, factual, conceptual, debatable)
- sourcing information
- critically analyzing sources for reliability and accuracy
- note taking - organizing data or research notes
- interviewing
- taking photos
- writing emails and thank you letters.

Teacher questions-

- What specific knowledge and skills might be needed that I do not already have?
- What type of materials and resources will contribute to my inquiry?
- Where can I source these materials?
- Who might I learn from? How can I contact them?

GK:

Watch the video and do the work given on page-5 of the book.


<https://www.youtube.com/watch?v=q7H6vd5t648&feature=youtu.be>

Discover India | 2


Festive Dishes

All over the world people enjoy and celebrate their cultures and traditions on some special days. On these days, special dishes are prepared that have become very important part of the festivals.


When do the people of India prepare these special dishes? Name the festivals.




1
Gujiya




2
Meetha Chawal




3
Sakkarai Pongal




4
Til Pitha




5
Charoni ka Paag



6
Chocolate Brownies



7
Payasam



8
Sewainyan

HELP / BOX

Eid Pongal Bihu
Janmashtami
Basant Panchami
Holi Onam
Christmas

NOW FIND OUT

Name four regional dishes of your state.

1. _____	2. _____
3. _____	4. _____

FUNNY FACT

Pitha of Assam is a cake which is made up of rice.

5

DANCE:

Learners learn and follow the step:

<https://www.youtube.com/watch?v=bgiQ2zO0JsY&feature=youtu.be>

PE:

Watch the video and Practice **SURYA NAMASKAR** at Home.

<https://www.youtube.com/watch?v=0hN31zbf8iw&feature=youtu.be>

ART:

FORK PRINTING SUNFLOWER

Observe the picture given below carefully and by using poster colours or acrylic colours, draw and colour your sunflower artwork by applying the technique of fork printing.

